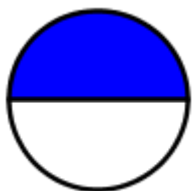


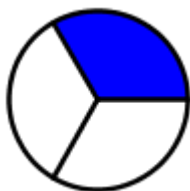
1. Nadaljuj zaporedje: 8125, 8075, 8025, _____, _____, _____, _____

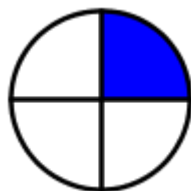
2. Poišči vsoto in razliko števil 3256 in 1691.

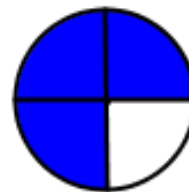
Vsota števil 3256 in 1691 je _____, razlika pa _____.

3. Zapiši z ulomkom, koliki del lika je pobarvan.









4. Denarne vrednosti zapiši na drugačen način.

489 € 5 c = _____ €

789, 05 € = _____ € _____ c

5. Izračunaj.

$\frac{1}{6}$ od 12 = _____

$\frac{1}{3}$ od _____ = 3

$$\begin{array}{r} 268,67\text{ €} \\ + 574,96\text{ €} \\ \hline \end{array}$$

$$\begin{array}{r} 802\text{ € } 12\text{ c} \\ - 59\text{ € } 55\text{ c} \\ \hline \end{array}$$

$6 + 3 \cdot 7 + 2 =$ _____

$5 \cdot 6 + 7 \cdot 8 =$ _____

$9 \cdot (6 - 4) =$ _____

236 · 5

34 · 8