

NACRTOVANJE ŠTIRIKOTNIKOV (dopolnilni pouk - 15.4.)

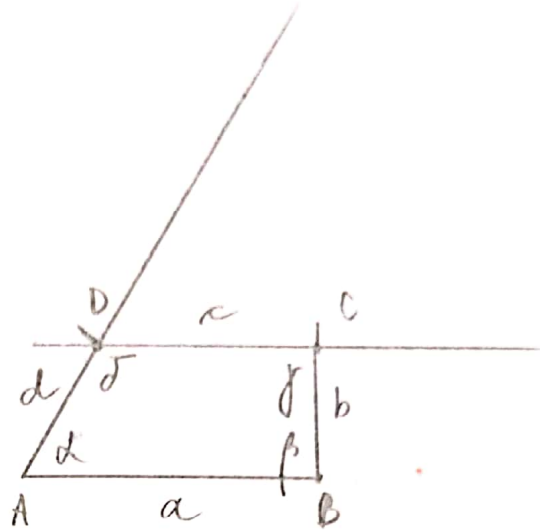
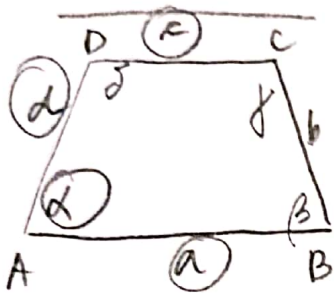
1) TRAPEZ ABCD

$$a = 4 \text{ cm}$$

$$d = 2 \text{ cm}$$

$$c = 3 \text{ cm}$$

$$\alpha = 60^\circ$$



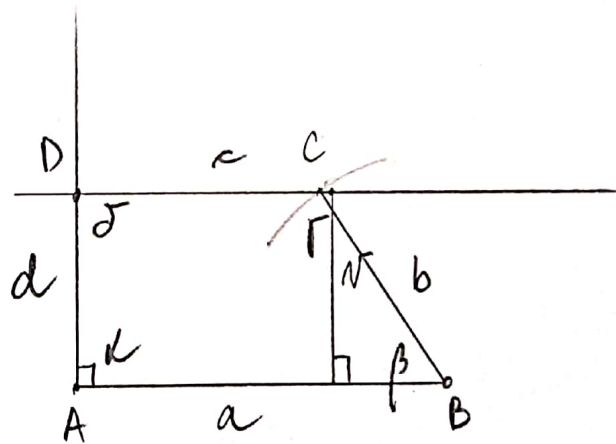
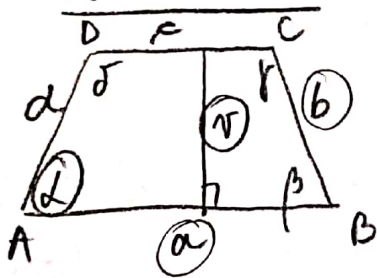
2) TRAPEZ ABCD

$$a = 5 \text{ cm}$$

$$b = 3 \text{ cm}$$

$$N = 2,5 \text{ cm}$$

$$\alpha = 90^\circ$$



3) ENAKOKR. TRAPEZ ABCD

$$a = 4,8 \text{ cm}$$

$$b = 2,5 \text{ cm}$$

$$c = 3 \text{ cm}$$

